



CORONA SECONDARY SCHOOL

AGBARA

A Culture of Excellence and Life-Long Learning

MID TERM ASSIGNMENT FOR THIRD TERM 2022/2023

CLASS: YEAR 8

CONTENT

GENERAL INSTRUCTIONS..... 2

Submission Deadline 2

Questions..... 2

Rubrics 2

Teachers' Contact Details 2

A. BASIC SCIENCE 3

B. DRAMA 4

C. MUSIC 5

D. BUSINESS STUDIES 6

E. HISTORY 7

F. NIGERIAN LANGUAGES..... 8

GENERAL INSTRUCTIONS

Submission Deadline

All assignments will be submitted on Monday, 5th June, 2023.

Questions

Students should note sections for each subject and read carefully:

- Individual subject content in focus.
- Questions and responses required.

Rubrics

Students should critically read rubrics as guides to know how scores are weighted.

Teachers' Contact Details

Your teacher's contact details are provided for inquiries where needed.

A. BASIC SCIENCE

Instruction: Answer all the questions in your Test and Assignment notebook.

1. What is a sound wave? [2]
2. Your vocal cords and a loudspeaker can both produce sound. Name two other sources of sound waves. [2]
3. Use these words or phrases to complete the sentences below. Some words or phrases are not needed.

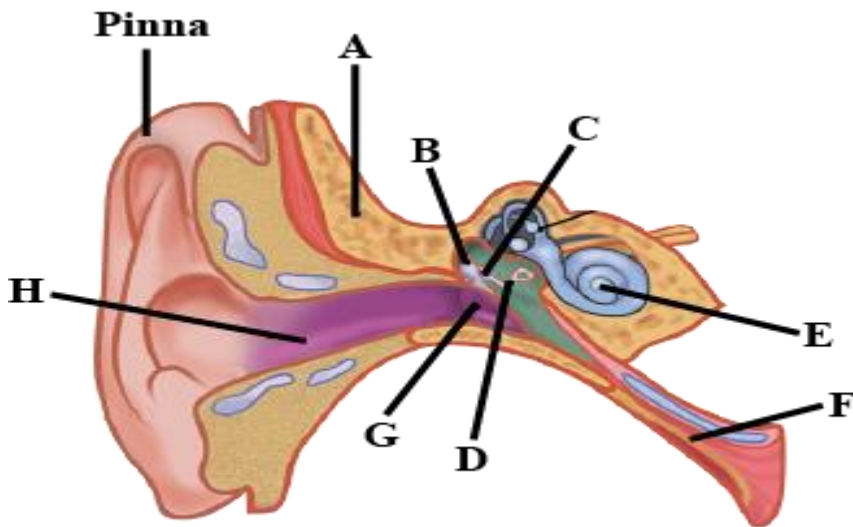
Closer together

further apart

less

more

- a. The speed of sound in water is greater than the speed of sound in the air because in water the particles are _____ than they are in air. [1]
 - b. The speed of sound in air is smaller than the speed of sound in steel because in steel, the particles are _____ than they are in air. [1]
 - c. Sound made under water will take _____ time to travel a certain distance than sound made in air. [1]
4. Here is a diagram of the ear.



Give the name of each part of the ear labelled A – H

- A. _____
- B. _____
- C. _____
- D. _____
- E. _____

F. _____

G. _____

H. _____

[8]

5. A friend calls your name. Describe:

a. How it travels to your ear.

[2½]

b. How it produces a signal that reaches your brain.

[2½]

Total: 20marks

Teacher's Contact Details		
Blessing Ezeala	+234 813 256 1490	Blessing.Ezeala@coronaschools.org
Sarah Bassey	+234 903 041 3410	Sarah.Bassey@coronaschools.org

B. DRAMA

Instruction: Answer all questions in your Test and Assignment notebook.

1. Dance is believed to be a very important art to mankind. As a theatre student, justify this assertion by identifying and extensively explaining five of its importance, with examples where necessary. [10]

2. As a theatre student critically justify the place of stunts and patterns in African dances [10]

Total: 20 marks

Teacher's Contact Details		
Anuoluwapo Akintade	+234 816 690 4101	Anuoluwapo.Akintade@coronaschools.org

C. MUSIC

Instruction: Attempt all questions in your Test and Assignment notebook.


1. Name these intervals.

Intervals


Worksheet 1

- name the intervals (watch the clefs).

1 2 3 4 5 6




7 8 9 10 11 12



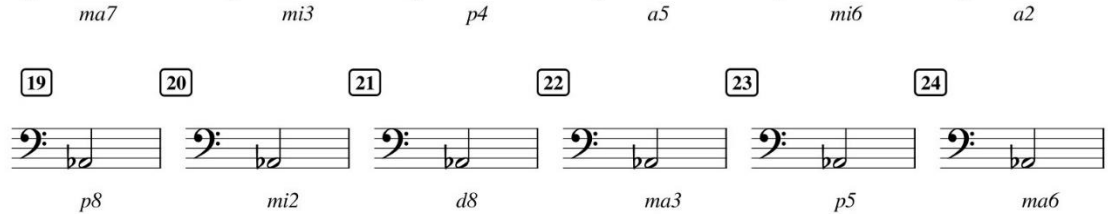
Detailed description: This section contains six pairs of musical staves, numbered 1 to 12. Each pair shows two notes on a staff. Pairs 1-6 are on treble clefs, and pairs 7-12 are on bass clefs. The intervals are: 1. Major 3rd (C4 to E4), 2. Major 2nd (C4 to D4), 3. Perfect 4th (C4 to F4), 4. Minor 3rd (C4 to Eb4), 5. Major 6th (C4 to A4), 6. Minor 6th (C4 to Ab4), 7. Minor 2nd (Bb3 to A3), 8. Major 2nd (Bb3 to C4), 9. Minor 3rd (Bb3 to Db3), 10. Major 3rd (Bb3 to D4), 11. Minor 3rd (Bb3 to Eb3), 12. Major 2nd (Bb3 to C4).

- write in the note the specified interval above the given note.

13 14 15 16 17 18



19 20 21 22 23 24



Detailed description: This section contains six pairs of musical staves, numbered 13 to 24. Each pair shows a given note on a staff and a blank space for another note. Pairs 13-18 are on treble clefs, and pairs 19-24 are on bass clefs. The intervals to be written are: 13. Major 7th (C4 to B4), 14. Minor 3rd (C4 to Bb3), 15. Perfect 4th (C4 to F4), 16. Augmented 5th (C4 to G#4), 17. Minor 6th (C4 to Ab4), 18. Augmented 2nd (C4 to D#4), 19. Perfect 8th (C4 to C5), 20. Minor 2nd (C4 to Bb3), 21. Diminished 8th (C4 to Bb4), 22. Major 3rd (C4 to E4), 23. Perfect 5th (C4 to G4), 24. Major 6th (C4 to A4).

[8]

2. Give a brief history of these Nigerian music genre.

- i. Apala
- ii. Juju
- iii. Fuji
- iv. Highlife

[12]

Total: 20 Marks

Teacher's Contact Details

Onome Abrameta

+234 905 173 8738

Onome.Abrameta@coronaschools.org

D. BUSINESS STUDIES

Instruction: Write creatively in your Test and Assignment notebook.

Identifying Business Opportunities

Fun Facts

Chinese businessman, Jack Ma, used \$60,000 of his own money to set up Alibaba Group. This is the world's largest business-to-business e-commerce site. Despite the huge risk, he is now worth \$1.6 billion. The growth of this business has been impressive. Within its first 10 years, Alibaba had 58 million businesses using its site.

Question

1. In not more than 50 words, describe your favorite Nigerian entrepreneur. [10]

Capital is an integral aspect of a business life. In fact, the volume of the capital you have to start a business determines the size of the business to an extent. This and more have remained a major setback for youths in Nigeria who are willing to start a business for themselves.

However, there are businesses you can do in Nigeria which may not require any form of financial capital.

2. Identify five business needs in Nigerian that do not require financial capital to start. [5]
3. From your answer above, identify five businesses you can do in your environment based on your personal skills and talent. [5]

Total: 20 marks

Teacher's Contact Details		
Busayo Anjorin	+234 813 066 7026	Busayo.Anjorin@coronaschools.org

E. HISTORY

Preamble: Empires, as we know it, are usually a result of conquering, and annexing other states or cities, and bringing them under a single political authority. (Reminds us of the term “CENTRALIZED SYSTEM/STATES, right?”). Examples of such Empires in West Africa were Ghana Empire (Kumbi Saleh), Mali Empire (Niani) and Songhai Empire (Gao) – all of which existed in what is known as the Golden Age of West Africa.

Each of these empires had states/countries that exist till date (in modern times). With this in mind, and with the aid of relevant sources for example, a map, please complete the following task.

Identify any (1) country in present-day West Africa that was covered by or existed under the Songhai empire.

Then go ahead and answer the following questions:

Rubrics:

1. Mention the capital (country and capital) [2]
2. What is the system of government currently practiced and **explain that system?** [6]
3. What is the name of the president/leader? [4]
4. What is/are the natural resource(s) of the country you identified? [4]
5. Which European country(ies) colonized her? [2]
6. Which language is commonly spoken by the people? [2]

Total: 20 marks

NOTE: The onsite students should have it done in their assignment notebook while the virtual students should send their answer via Mr. Osakwe 's email.

Teacher's Contact Details		
Praise Osakwe	+234 811 601 2040	Praise.Osakwe@coronaschools.org

F. NIGERIAN LANGUAGES

Instruction: Answer all questions in your Test and Assignment notebook.

NAMING CEREMONY

- a. Explain the value of childbearing from your socio-cultural background [5]
- b. List ten tribal/local names and their English meanings. [5]
- c. List ten items used during a naming ceremony. [5]
- d. What are the activities done during a naming ceremony from your cultural perspective? [5]

Total: 20 marks

Teacher's Contact Details		
Ridwan Shittu	+234 906 608 3168	Ridwan.Shittu@coronaschools.org
Ijeoma Nwankwo	+234 803 369 0200	Ijeoma.Nwankwo@coronaschools.org